

# Money

Shopping would be difficult without knowing about money.  
Do you know what these coins are worth?



p means pence.  
There are 50 pence or pennies in 50p.



Will you help me count my change? Add up the value of these coins to find the total.

a.



c.



b.

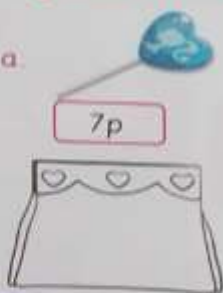


d.

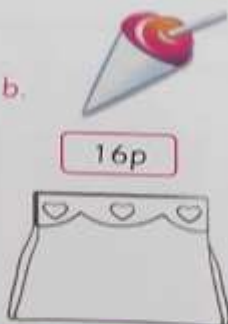


I'm taking time out from shopping for a quick treat.  
Draw the coins you would use to buy these delicious sweets.  
*Great choices!*

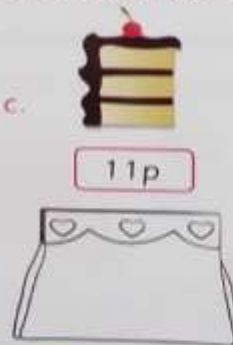
a.



b.



c.



Sweet treats are the best!





# Money

When I buy something, I remember to check my change. Practise finding totals of **coins** and giving **change**. When you give change, try counting up.

A lollipop costs 39p. Think about the change you will get from 50p.



Count on from 39p to 50p.

$$\begin{array}{r} +1p \quad +10p \\ 39p \quad 40p \quad 50p \end{array}$$

The change is 11p.

Draw the 3 coins you would use to buy each of these.



2

This is the change given from 50p. How much did each item cost?



Cost → .....p



Cost → .....p



Cost → .....p

Amazing work girlfriend!

Put a sticker here!