

# Key stage 2

## The ridiculous questions paper

### Paper 1: questions

First name						
Middle name						
Last name						
Date of birth	Day		Month		Year	
School name						
DfE number						



**[BLANK PAGE]**

Please do not write on this page.



## Instructions

### Questions and answers

There are different types of question for you to answer in different ways. The space for your answer shows you what type of answer is needed. Write your answer in the space provided. Do not write over any barcodes.

### Multiple-choice answers

For some questions, you do not need to do any writing. Read the instructions carefully so that you know how to answer each question.

### Short answers

Some questions are followed by a line or a box. This shows that you need to write a word, a few words or a sentence.

### Marks

The number under each line at the side of the page tells you the maximum number of marks for each question.

You should work through the booklet until you are asked to stop.


Work as quickly and as carefully as you can. If you finish before the end, go back and check your work.

**You have 45 minutes to answer the questions in this booklet.**



1

Which line is longer?



1 mark

2

Some months have 31 days, how many months have 30?

1 mark



3

What is the mistake these photographs have in common?



1 mark

4

Divide 20 by half and add 10.

1 mark




5

If there are 25 apples in a basket and you take away 6, how many apples have you got?

1 mark

6

How many holes does this T-shirt have?



1 mark



7

A farmer has a field containing 17 sheep, then all but 7 drop down and die.

How many sheep are left standing in the field?

1 mark

8

Can you manage this one in 5 seconds?

**CAN YOU SPOT  
SPOT A MISTAKE HERE?**

1 2 3 4 5 6 7 8 9

1 mark



9

Two coins add up to 55p, but one of the coins is not a fifty pence piece.

1 mark

What are the two coins?

10

Can you shade in the hidden baby?



1 mark





11

Why are 2020 10p coins worth more than 2018 10p coins?

1 mark

12

It takes exactly 3 minutes (120 seconds), to boil an egg in a pan of boiling water.

How long does it take to boil 3 eggs?

1 mark



**13** Using your best estimating skills, how many animals did Moses take onto the ark before the Great Flood.

(You do not have to be exact and can be within 1000 either way.)

1 mark

**14** How many 30p stamps are there in a dozen?

1 mark



15

If the day before the day after tomorrow will be Saturday, and the day after the day before yesterday was Thursday, what is today?

1 mark

16

How much dirt is there in a square hole which is 1 metre across each side and 2 metres deep?

(Tip: to calculate volume, you must multiply length by width by depth.)

1 mark

How much dirt is there in a hole which is twice as big?

1 mark



17


A cowboy rode into town on Monday. He stayed two days then rode out of town on Sunday.

How is this possible?

1 mark

18

How many legs does this elephant have?



1 mark



Find 10 differences between the 2 pictures!



10 marks



**[END OF TEST]**

Please do not write on this page.



2016 key stage 2 English grammar, punctuation and spelling

Paper 1: questions

Print version product code: STA/16/7372/p ISBN: 978-1-78315-925-3

Electronic PDF version product code: STA/16/7372/e ISBN: 978-1-78315-926-0

### For more copies

Additional printed copies of this booklet are not available. It can be downloaded from [www.gov.uk/government/publications](http://www.gov.uk/government/publications).

© Crown copyright and Crown information 2020

### Re-use of Crown copyright and Crown information in test materials

Subject to the exceptions listed below, the test materials on this website are Crown copyright or Crown information and you may re-use them (not including logos) free of charge in any format or medium in accordance with the terms of the Open Government Licence v3.0 which can be found on the National Archives website and accessed via the following link: [www.nationalarchives.gov.uk/doc/open-government-licence](http://www.nationalarchives.gov.uk/doc/open-government-licence).

When you use this information under the Open Government Licence v3.0, you should include the following attribution: 'Contains public sector information licensed under the Open Government Licence v3.0' and where possible provide a link to the licence.



### Exceptions – third-party copyright content in test materials

You must obtain permission from the relevant copyright owners, as listed in the '2016 key stage 2 tests copyright report', for re-use of any third-party copyright content which we have identified in the test materials, as listed below. Alternatively you should remove the unlicensed third-party copyright content and/or replace it with appropriately licensed material.

### Third-party content

These materials contain no third-party copyright content.

If you have any queries regarding these test materials contact the national curriculum assessments helpline on 0300 303 3013 or email [assessments@education.gov.uk](mailto:assessments@education.gov.uk).

